

**CANADIAN  
COLLEGE OF  
PHYSICISTS IN  
MEDICINE**



**LE COLLÈGE  
CANADIEN  
DES PHYSICIENS  
EN MÉDECINE**

**CCPM Membership Examination**

**Edition 11.1**

**MEDICAL PHYSICS QUESTIONS  
FOR  
MEMBERSHIP EXAMINATION**

**Edition 11.1**

**Canadian College of Physicists in Medicine**

**CANADIAN  
COLLEGE OF  
PHYSICISTS IN  
MEDICINE**



**LE COLLÈGE  
CANADIEN  
DES PHYSICIENS  
EN MÉDECINE**

**CCPM Membership Examination**

**Edition 11.1**

Medical Physics Questions For  
Membership Examination  
(Edition 11.1)

Questions de Physique Médicale  
pour L'Examen d'Admission  
(Édition 11.1)

Copyright © 2019 by the  
Canadian Organization of  
Medical Physicists and the  
Canadian College of Physicists  
In Medicine

Copyright © 2019 par  
L'Organisation canadienne des  
physiciens médicaux et  
Le Collège canadien des  
physiciens en médecine

The CCPM Examination Booklets by [The Canadian College of Physicists in Medicine](http://www.ccpm.ca) are licensed under a [Creative Commons Attribution-Noncommercial-Share Alike 2.5 Canada License](http://creativecommons.org/licenses/by-nc-sa/2.5/ca/) (<http://creativecommons.org/licenses/by-nc-sa/2.5/ca/>).

Available from the:

Disponible de:

Canadian College of  
Physicists in Medicine

Le Collège canadien des  
physiciens en médecine

Andrew Kerr, PhD, P.Eng, FCCPM  
CCPM Registrar / Greffier du CCPM  
[registrar@ccpm.ca](mailto:registrar@ccpm.ca)

Electronic version: ISBN: 0-9684873-3-5

**CANADIAN  
COLLEGE OF  
PHYSICISTS IN  
MEDICINE**



**LE COLLÈGE  
CANADIEN  
DES PHYSICIENS  
EN MÉDECINE**

**CCPM Membership Examination**

**Edition 11.1**

**FOREWORD TO THE ELEVENTH EDITION**

This is the eleventh edition of the published question bank for the Canadian College of Physicists in Medicine (CCPM) membership exam. This is an exam to enable the CCPM to certify that those who pass the 4-part written exam and 3-part oral exam are competent in their medical physics subspecialty. Combined with credentialing for the exam, this is an exhaustive process into which a candidate is entering.

All question banks were updated in 2015. The MRI question bank was further updated in 2016. Smaller updates continue to take place each year, so it is important to ensure that the correct question bank is downloaded when exam preparation begins! Much work has been invested in producing a comprehensive set of questions since 1984 thanks to the hard work of Past Chief Examiners: Ervin B. Podgorsak, Terry M. Peters, Gino Fallone, Ting-Yim Lee, Katharina E. Sixel, Michael D.C. Evans, Robert Corns, Boyd McCurdy and Renée Larouche and all those who helped them.

A Preparation Guide now exists and is posted on the CCPM website. The Preparation Guide discusses time management strategies and the typical expected length of hand-written answers.

The College wishes to thank Geneviève Jarry, deputy examiner, as well as the many volunteers that help each year. Candidates preparing for their exam who have comments about the question bank are invited to contact me ([chiefexaminer@ccpm.ca](mailto:chiefexaminer@ccpm.ca)).

**Best of luck to all of the candidates,**

**Alasdair Syme**  
Halifax, NS, Canada  
September 28th 2019



**CCPM Membership Examination**

**Edition 11.1**

**SUGGESTED TEXTS FOR PREPARATION OF THE EXAMINATION.**

It must NOT be assumed that questions will be based solely on materials from these texts.

**A: Radiation Oncology**

1. The physics of radiation therapy: F. M. Kahn; Williams and Williams, Baltimore.
2. Introduction to radiological physics and radiation dosimetry: P.H. Attix; Wiley, New York.
3. The physics of radiology (Fourth Edition.): H.E. Johns and J.R. Cunningham; Charles C. Thomas, Springfield Ill.
4. Modern technology of radiation oncology: J. Van Dyk (Editor); Medical Physics Publishing, Madison Wisconsin.
5. Radiation physics for medical physicists: E.B. Podgorsak; Springer, New York.
6. Radiation oncology physics: a handbook for teachers and students: E.B. Podgorsak (Editor); IAEA, Vienna.
7. Radiobiology for the radiobiologist: E.J. Hall; Lippincott Williams & Wilkins, New York.
8. ICRP publication 103: 2007 recommendations of the international commission on radiological protection, The International Commission on Radiological Protection; New York, 2007
9. NCRP report 147: Structural shielding design for medical x-ray imaging facilities: National Council on Radiation Protection and Measurements; Bethesda MD.
10. NCRP report 151: Structural shielding design and evaluation for megavoltage X- and gamma-ray radiotherapy facilities: National Council on Radiation Protection and Measurements; Bethesda MD.
11. CPQR Technical Quality Control Guidelines. <http://www.cpqr.ca/programs/technical-quality-control/>
12. ICRP publication 112: Preventing Accidental Exposures from New External Beam Radiation Therapy Technologies, The International Commission on Radiological Protection; New York, 2009

**B: Diagnostic Radiology**

1. Physics of radiology (2nd Ed.): A. Wolbarst, Medical Physics Publishing, Madison, WI; 2005
2. Review of Radiological Physics (3rd Ed.): W. Huda, R.M. Slone; Lippincott Williams & Wilkins; 2010
3. Essential Physics of Medical Imaging (2nd Ed.): J.T. Bushberg, J.A. Seibert, E.M. Leidholdt, J.M. Boone; Lippincott Williams & Wilkins; (2001)
4. Medical Imaging Signals and Systems: J.L. Prince, J. Links; 2005
5. Medical Imaging Physics (4th Ed.): W.R. Hendee, E.R. Ritenour; Wiley-Liss; 2002
6. Computed Tomography: Fundamentals, System Technology, Image Quality, Applications (2nd Ed.): W.A. Kalender; Wiley-VCH; 2006
7. Ultrasound Physics and Instrumentation (4th Ed): W.R. Hedrick, D.L. Hykes, D.E. Starchman; Mosby; 2004
8. Guidelines for the safe use of diagnostic ultrasound equipment. Prepared by the Safety Group of the British Medical Ultrasound Society Ultrasound 2010; 18: 52–59.
9. Medical electrical equipment – Characteristics of digital X-ray imaging devices – Part 1: Determination of the detective quantum efficiency. International Standard IEC 62220-1



**CCPM Membership Examination**

**Edition 11.1**

**C: Nuclear Medicine**

1. Physics in nuclear medicine (3rd Ed): S.R. Cherry, J.A. Sorenson and M.E. Phelps; W.B. Saunders, Philadelphia; 2003
2. Nuclear medicine physics: L.E. Williams (Ed); CRC Press, Boca Raton.
3. The physics of radiology (4th Ed.): H.E. Johns and J.R. Cunningham; Charles C. Thomas, Springfield Ill.
4. Introductory physics of nuclear medicine, R. Chandra; Lea & Febiger, Philadelphia.
5. Radiation detection and measurement, G. F. Knoll; John Wiley and Sons, Third Edition, 2000.
6. Basic science of nuclear medicine, R.P. Parker, P.H.S. Smith, D.M. Taylor; Churchill Livingstone, New York.

**D: Magnetic Resonance**

1. Nuclear magnetic resonance imaging in medicine and biology: P.G. Morris; Oxford University Press, Oxford.
2. Magnetic resonance imaging: physical principles and sequence design, R.W. Brown, YN Cheng, E.M. Haacke M.R. Thompson, and R. Venkatesan, A. John Wiley & Sons, 2014.
3. In vivo NMR Spectroscopy: principles and techniques, R. A. de Graaf, John Wiley and Sons, 2007.
4. Questions and answers in magnetic resonance imaging, Second Edition, A.D. Elster and J. H. Burdette, Mosby, 2001.
5. Handbook of MRI pulse sequences, M. A. Bernstein, K. F. King, and X. J. Zhou, Elsevier Academic Press, 2004.
6. MRI: Basic Principles and Applications (4th Ed.); M.A. Brown, R.C. Semelka; Wiley-Blackwell; 2010
7. Principles of Magnetic Resonance Imaging: A Signal Processing Perspective, Z.P. Liang and P.C. Lauterbur, Wiley-IEEE, 1999

**TABLE OF CONTENTS**

**Suggested Texts**

**Parts III and IV Questions:**

**Section A: Radiation Oncology Specialty**

**Section B: Diagnostic Radiology Specialty**

**Section C: Nuclear Medicine Specialty**

**Section D: Magnetic Resonance Specialty**



CANADIAN  
COLLEGE OF  
PHYSICISTS IN  
MEDICINE



LE COLLÈGE  
CANADIEN  
DES PHYSICIENS  
EN MÉDECINE

CCPM Membership Examination

Edition 11.1

*Section C: Nuclear Medicine Specialty*

You will be required to answer **FIVE** questions from Part III and **FOUR** questions from Part IV. The total time for both Parts is 2.5 hours. Each question in Part III is worth 20%, totaling to 100%. Each question in Part IV is worth 25%, totaling to 100%.

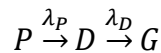


III NUCLEAR MEDICINE SPECIALTY

1. Briefly define or explain:
 

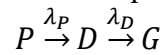
(a) activity $A$	(f) half-life $t_{1/2}$
(b) specific activity $a$	(g) mean lifetime $\tau$
(c) carrier-free source	(h) decay constant $\lambda$
(d) branching ratio	(i) decay chain
(e) energy level width $\Gamma$	(j) daughter activity
2. (a) Sketch the graphs for a typical radioactive nucleus, relating the activity to time  $t$  on a semi-log plot and on a linear plot.  
 (b) Show the half-life ( $t_{1/2}$ ) and the mean lifetime ( $\tau$ ) on the time axis and calculate the relationship between  $\tau$ ,  $t_{1/2}$ , and the decay constant ( $\lambda$ ).

3. Consider a radioactive decay chain, in which a radioactive parent nuclide **P** decays to a radioactive daughter **D**, which in turn decays to a stable nuclide **G**:



Let  $P$ ,  $D$  and  $G$  represent the number of parent and progeny nuclei present at some arbitrary time  $t > 0$ , let  $\lambda_P$  and  $\lambda_D$  be the decay constants for  $P$  and  $D$  respectively, and assume at time  $t = 0$ ,  $P(0) = P_0$ ;  $D(0) = 0$ ; and  $G(0) = 0$ . Derive formulae for  $P(t)$ ,  $D(t)$  and  $G(t)$ .

4. Consider a radioactive decay chain, in which a radioactive parent nuclide **P** decays to radioactive daughter nuclide **D** with decay constants  $\lambda_P$  and  $\lambda_D$  respectively:



The activities of parent ( $A_P$ ) and daughter ( $A_D$ ) nuclei present at some arbitrary time are

$$A_P = A_{P_0} e^{-\lambda_P t}$$

$$A_D = A_{P_0} \times \frac{\lambda_D}{\lambda_D - \lambda_P} (e^{-\lambda_P t} - e^{-\lambda_D t})$$

- (a) Sketch on the same graph the activities  $A_P$  and  $A_D$  vs time  $t$  for when  $\lambda_P < \lambda_D$ .
- (b) Calculate the time,  $t_{\max}$ , for the maximum in  $A_D$  and show that this occurs when  $A_P = A_D$ .
- (c) Show for  $\lambda_P = \lambda_D(1 - \varepsilon)$ , where  $0 < \varepsilon \ll 1$ , that  $t_{\max}$  may be expressed as  $t_{\max} \approx 1/(\lambda_P \lambda_D)^{1/2}$ .

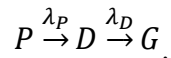




CCPM Membership Examination

Edition 11.1

5. Consider a radioactive decay chain, in which a radioactive parent nuclide **P** decays to an unstable progeny nuclide **D** with decay constants  $\lambda_P$  and  $\lambda_D$  respectively:



The activities of parent ( $A_P$ ) and daughter ( $A_D$ ) nuclei present at some arbitrary time are

$$A_P = A_{P_0} e^{-\lambda_P t}$$

$$A_D = A_{P_0} \times \frac{\lambda_D}{\lambda_D - \lambda_P} (e^{-\lambda_P t} - e^{-\lambda_D t})$$

- (a) Sketch the activities  $A_P$  and  $A_D$  vs time  $t$  for:
- a short-lived parent,  $\lambda_P > \lambda_D$ ;
  - a long-lived parent,  $\lambda_P < \lambda_D$ ;
  - a very long-lived parent,  $\lambda_P \ll \lambda_D$ ; and
  - an almost stable or constantly replenished parent,  $\lambda_P t \ll \lambda_D t \ll 1$ .
- (b) Define transient and secular equilibrium.
6. Briefly define or explain:
- |                          |                                   |
|--------------------------|-----------------------------------|
| (a) neutron activation   | (f) fission fragments             |
| (b) isomeric transition  | (g) nuclear chain reaction        |
| (c) neutron fluence rate | (h) moderator in nuclear reaction |
| (d) annihilation photon  | (i) artificial radioactivity      |
| (e) specific ionization  | (j) natural radioactivity         |
7. Discuss the interactions of the particles listed below with both tissues and with high atomic number materials
- alpha particles (kinetic energy: few MeV)
  - beta particles (kinetic energy: few MeV)
  - thermal neutrons
  - fast neutrons.
8. Suppose a sample of material is bombarded with neutrons and that a radioisotope is produced at a steady rate  $Q$ . There is initially no radioisotope present and it decays at a rate  $-\lambda N$ , where  $N$  is the number of radioactive nuclides present at time  $t$  and  $\lambda$  is the decay constant.
- Derive the formula for the radioisotope's activity  $A$  as a function of time  $t$  during the neutron bombardment.
  - What assumption is being made to produce the radioisotope at a steady rate  $Q$ ?



CCPM Membership Examination

Edition 11.1

9. Material **X** has an initial number of nuclei  $N_{X_0}$  and is placed in a neutron field with fluence rate  $\Phi$  ( $cm^{-2} s^{-1}$ ). A radioisotope **Y** is produced, with the cross-section  $\sigma$  ( $cm^2$ ) for the reaction  $n + X \rightarrow Y$ . The isotope **Y** decays at a rate of  $-\lambda N_Y$  where  $N_Y$  is the number of **Y** nuclei at time  $t$  and  $\lambda$  is the decay constant. Show that the maximum activity for **Y** is reached when

$$t = \frac{\ln(\lambda/\sigma\Phi)}{\lambda - \sigma\Phi}.$$

10. When a radioactive nuclide has a daughter of shorter half-life, it is often possible to separate the two, mechanically or chemically. Several such systems, known as nuclear generators, are in use. Name at least three such systems and sketch the activity of parent and daughter inside the generator with respect to time and assuming:

- no removal of daughter; and
- periodic removal of the daughter. Assume 100% efficiency at removing the daughter from the generator.

11. Briefly define or explain:

- |                            |                               |
|----------------------------|-------------------------------|
| (a) nuclear excited state  | (f) annihilation photon       |
| (b) atomic excited state   | (g) internal conversion yield |
| (c) fluorescence yield     | (h) characteristic radiation  |
| (d) average $\beta$ energy | (i) bremsstrahlung            |
| (e) isomeric state         | (j) mass deficit              |

12. Discuss  $\alpha$  decay in general, give the general relationship for the total energy  $Q_\alpha$  liberated in  $\alpha$  decay and sketch an energy level diagram for a typical  $\alpha$ -decay.

13. Use the invariant  $E^2 - p^2c^2 = Inv$  to derive a general relationship for threshold in a nuclear reaction  $A(a,b)B$  where  $a$  and  $b$  are the incoming and outgoing particles or photons.

14. (a) Show for the photodisintegration of the deuteron,  $D(\gamma,n)p$ , the threshold energy is

$$E_\gamma = B_D \left( 1 + \frac{B_D}{2m_D c^2} \right),$$

where  $B_D$  is the total binding energy of the deuteron and  $m_D c^2$  is the rest energy of the deuteron.

- (b) Show for pair production in the field of a nucleus **A**, the threshold energy is

$$E_\gamma = 2m_e c^2 \left( 1 + \frac{m_e c^2}{m_A c^2} \right)$$

where  $m_A c^2$  is the rest energy of **A** and  $m_e c^2$  is the rest energy of an electron.



CCPM Membership Examination

Edition 11.1

15. (a) Sketch and briefly discuss the curve  $E_B/A$  vs  $A$  where  $E_B$  is the total binding energy of any nucleus and  $A$  is its atomic mass. Indicate and briefly discuss the regions representing fusion and fission on the curve.  
 (b) Using the curve sketched in (a), estimate the overall energy (in MeV) released if U238 fissions spontaneously into two equal and stable fragments with the release of four neutrons. What fraction of the U238 mass is converted into energy?  
 (c) Assuming the large fission masses in (b) take up negligible Kinetic Energy and that on average, the four neutrons share the available energy equally, calculate the average speed of a neutron, as expressed as a fraction of the speed of light,  $v/c$ .

16. Briefly define or explain:

- |                                    |  |
|------------------------------------|--|
| (a) nuclear resonance fluorescence | (f) Cerenkov radiation                 |
| (b) electron capture               | (g) internal conversion coefficient    |
| (c) Mossbauer effect               | (h) Auger electrons                    |
| (d) characteristic x ray           | (i) mass energy absorption coefficient |
| (e) triplet production             | (j) threshold for nuclear reaction     |

17. Discuss gamma decay in general, give a typical example with an energy level diagram and explain internal conversion and isomeric transitions.

18.

- (a) What radiation safety considerations are particular to breast-feeding mothers?  
 (b) For what nuclear medicine exams is it recommended that breast feeding be discontinued and for how long?  
 (c) A mother who received an injection of Tc-99m-pertechnetate has a maximum concentration of tracer in breast milk at 3 hrs measured to be 0.06 MBq/ml. Two additional measurements taken over the next 5 hours suggest a biological half-life of 24 hours. Assuming the infant ingests 150 ml per feeding and feeds every four hours, when is it safe for the infant to start feeding? Assume an effective dose to the newborn of 0.14 mSv/MBq of ingested milk.

19. Sketch a diagram representing the two most important modes of photon interactions with a medium for photons energies used in nuclear medicine, briefly discuss the two effects, and state the dependence of the appropriate mass attenuation coefficient upon the photon energy and atomic number of the medium.



**CCPM Membership Examination**

**Edition 11.1**

**20.** A number of different materials are involved in imaging a patient in Nuclear Medicine.

- (a) What are the effective atomic numbers for:
- |            |                 |
|------------|-----------------|
| (i) NaI    | (v) bone        |
| (ii) BGO   | (vi) muscle     |
| (iii) LSO  | (vii) lead      |
| (iv) water | (viii) tungsten |
- (b) What is the relative importance of the photoelectric effect and the Compton effect in the patient and the camera?
- (c) What is the potential impact of photon interactions in the camera head on the image quality?

21. Briefly define or explain:

- |                                  |                              |
|----------------------------------|------------------------------|
| (a) dynode                       | (f) valence band             |
| (b) photocathode                 | (g) forbidden zone           |
| (c) fluorescence                 | (h) energy gap               |
| (d) crystal light decay constant | (i) surface barrier detector |
| (e) exciton                      | (j) n-type semiconductor     |

**22.** Describe the principle of operation of a scintillation counter. Draw a diagram of a typical counter and clearly label its components. Also sketch a photomultiplier tube and describe its operation.

**23.** Discuss photon energy spectrometry based on scintillation detectors. Sketch a typical pulse height spectrum and define the following features:

- |                                      |                               |
|--------------------------------------|-------------------------------|
| (a) photopeak                        | (e) coincidence-sum peaks     |
| (b) Compton valley, edge and plateau | (f) backscatter peak          |
| (c) x-ray escape peaks               | (g) annihilation peak         |
| (d) annihilation escape peak         | (h) characteristic x-ray peak |

**24.** Discuss the photopeak energy resolution in scintillation spectrometry and give typical values for at least three different scintillation materials. Discuss the reasons for the relatively poor energy resolution of scintillation detectors. Sketch a pulse height spectrum obtained with a NaI(Tl) crystal for a Cs-137 gamma source (photon energies: 31.8 keV, 37.3keV and 662 keV).

25. Briefly define or explain:

- |   |                         |
|---|-------------------------|
| (a) radiation quality                       | (f) ALARA principle     |
| (b) somatic effects                         | (g) absorbed dose       |
| (c) stochastic effects                      | (h) equivalent dose     |
| (d) relative biological effectiveness (RBE) | (i) effective dose      |
| (e) maximum permissible dose                | (j) LD <sub>50/30</sub> |



CCPM Membership Examination

Edition 11.1

26. A 100 MBq of Y-90 is injected into the center of a tumour. Assuming a point-source of Y-90, estimate the initial dose rate from beta-radiation to the surrounding soft-tissues as a function of radius. What is the dose delivered to the tumour? Give your answers in SI units and state any assumptions that you find necessary to make.
27. A patient receives 5.5 GBq of I-131 for treatment of thyroid metastases.
- What precautions must be taken to ensure proper protection of other persons?
  - Should the patient's urine be collected? If so, for how long should it be kept and how should it be disposed of? What are the arguments against such collection?
28. The chairman of the local university physics department is referred to the nuclear medicine department for a bone scan. During the examination he asks a number of questions pertinent to radiation safety. Give your responses to the following questions.
- To which government agencies is the Nuclear Medicine Department responsible for
    - procurement of radioisotopes;
    - storage of radioisotopes;
    - radioisotope usage in vivo;
    - disposal of radioactive wastes?
  - What are the detrimental effects of radiation at the levels in use in a nuclear medicine department?
  - Are there any realistic circumstances in diagnostic nuclear medicine when a potentially dangerous dose of a radiopharmaceutical agent may be administered to a patient?
  - What instruments would you want to have available for purposes of monitoring radiation levels, and why?
29. Briefly define or explain:
- |                       |                                  |
|-----------------------|----------------------------------|
| (a) beta particle     | (f) linear energy transfer (LET) |
| (b) alpha particle    | (g) half-value layer (HVL)       |
| (c) ionization        | (h) positron decay               |
| (d) K-absorption edge | (i) electron capture             |
| (e) ion pair          | (j) internal conversion          |
30. A gamma-ray photon is incident on a detector, undergoes two sequential Compton scattering events through angles  $\Theta_1$  first, then  $\Theta_2$  and then it escapes. Demonstrate that the total energy deposited in the detector is the same if the sequence of angles is reversed, i.e. first, then  $\Theta_1$  and then it escapes.
31. Using the principle of conservation of energy and momentum, show that a photoelectric process cannot take place with a free electron.
32. For the 140.5 keV photon of Tc-99m and the 364 keV photon of I-131, sketch graphs showing the energies of Compton-scattered photons versus scattering angle.





33. Considering the primary imaging photons emitted by Tc-99m and I-131, at what angle of scatter has a Compton-scattered photon lost energy equivalent to the energy resolution at the photopeak energy of a gamma camera using a 0.5" thick NaI(Tl) scintillation detector. Discuss the implications of this for imaging referring specifically to detector photopeak efficiency and the (in)ability of pulse height analysis to discriminate against photons scattered in the patient.
34. Describe the operation of three types of personnel radiation monitors that depend on different methods to detect and integrate radiation exposure or dose. Indicate the advantages and disadvantages of each type of detector.
35. A surface is surveyed with a G-M counter for contamination and a small spot of contamination is found which gives a reading of 15,000 counts/min. The normal background reading is 45 counts/minute. The counting rate becomes negligible when a 5 mm plastic absorber is placed over the area. The counting rate for a bismuth-210 beta reference source counted in a similar manner is 9,400 counts/minute but the source is known to emit 32,600 beta particles/minute.
- What is the rate of emission of beta particles from the contaminated surface?
  - What factors modify the count rate detected by the G-M detector?
36. A patient is given 3.5 MBq of I-131 orally. Assume the uptake to the thyroid is 30%, the average energy of the beta particles is 0.1915 MeV, the biological half-life is 80 days and the mass of the thyroid is 20 grams. Calculate the dose to the thyroid. Justify why the photon contribution to the dose is negligible.
37. The nuclear medicine dept wishes to dispose of its solid waste (syringes, cups, straws, etc) that were used during I-131 treatments. See the *Nuclear Substances and Radiation Devices Regulations* published at the CNSC website for the exemption quantity regulations.
- What limits, if any, apply?
  - What additional considerations should be taken into account?
  - What alternative approaches could be taken?
38. (a) A nuclear medicine department uses a fume hood for preparation and storage of I-131 treatments. The fume hood vents on the roof of the building. The flow rate of the air through the hood that has an opening of  $1 \text{ m}^2$  is 7.1 linear m/min. What is the maximum permissible weekly discharge rate? See the *Nuclear Substances and Radiation Devices Regulations* published at the CNSC website for the exemption quantity regulations.
- (b) Describe a means by which the hospital would be able to increase the amount of I-131 used per week.
39. Starting with the Binomial distribution, derive an analytical expression for the Poisson distribution. Derive expressions for the mean and variance of the mean in terms of the parameter of the Poisson distribution.



40. Sketch a Poisson distribution that corresponds to the distribution of counts from a radioactive source, where determinations have been made for a fixed period of time. Assume that the true average is 1000 counts per 10 seconds. Indicate on the graph the range in counts in which 66%, 95%, and 99% of the observations should fall.
41. (a) Suppose the “true” background radiation level is 100 counts per minute. You wish to measure the background rate and are trying to decide between two methods:
- Measuring the background 10 times using 1 minute intervals and then taking the mean of the 10 readings.
  - Measuring the background once using a 10 minute interval and then scaling the result to a counts-per-minute rate.
- Show the expected mean value for your measured background and the standard error in the mean is the same. State any assumptions you make.
- (b) Suppose you measured the background with five one-minute measurements and one ten-minute measurement with the results:  
112, 108, 109, 82, 93 and 995.  
Using this data, calculate the best estimate of the background count rate in cpm.
42. Nuclear medicine imaging procedures are often terminated using “count density” criteria. Making assumptions regarding system spatial resolution of a gamma camera, suggest what count density is required to demonstrate that a 10% change in counts per square centimeter is significant at a 95% confidence level.
43. Let pixels of two digitized scintillation camera images be represented by  $X(i, j)$  and  $Y(i, j)$ , with assumed errors of  $\Delta X(i, j)$  and  $\Delta Y(i, j)$ , respectively. What is the error of a picture element formed by  $X(i, j) \times Y(i, j)$ , and by  $X(i, j) + Y(i, j)$ ?
44. Briefly define or explain the use of:
- |                                   |                                     |
|-----------------------------------|-------------------------------------|
| (a) bilinear interpolation        | (f) maximum intensity projection    |
| (b) Levenberg-Marquardt algorithm | (g) ray tracing                     |
| (c) histogram equalization        | (h) back-propagation neural network |
| (d) deconvolution                 | (i) gaussian smoothing              |
| (e) biexponential fitting         | (j) morphological operator          |



**CCPM Membership Examination**

**Edition 11.1**

45. What is the application of renal scintigraphy? Provide typical acquisition parameters and describe briefly radiopharmaceuticals used. Discuss image processing and curve analysis methods used in the interpretation of these scans, including background correction techniques and deconvolution analysis. Describe quantitative physiological parameters that can be obtained from renal scintigraphy.
46. Describe image-processing techniques used for automated edge detection and determination of the ejection fraction in planar radionuclide ventriculography. Discuss the reliability, and accuracy of these techniques. Discuss the use of multiple harmonics analysis. What other physiological parameters, can be derived from these images?
47. Describe in detail the bull's eye analysis algorithm applied to the myocardial perfusion tomography including techniques used for the comparison with the normal database.
48. What are the relevant design parameters for collimators used in clinical radionuclide imaging? How do these characteristics affect the performance of the collimator?
49. (a) What collimators would you select for each of the following procedures? Explain the reasons for your choice.
- (i) thyroid scintigraphy with Tc-99m-pertechnetate;
  - (ii) first-pass angiography;
  - (iii) images of the knee using Ga-67 citrate ("spot views")
  - (iv) a lung scan to detect metastases in a patient with local recurrence of thyroid cancer treated with radioiodine three days earlier.
- (b) Would you recommend a high-sensitivity collimator coupled with resolution recovery during reconstruction over a high-resolution collimator? Please give your reasons why or why not.
50. Outline the gamma camera quality control protocol for a multi-head SPECT system with whole body capabilities. Indicate the frequency of the procedures to be performed and briefly describe the techniques used.
51. Draw five examples of abnormal test patterns obtained using a bar phantom, making reference to the type of equipment malfunction involved.
52. You have been asked to review proposals for human research that will include the administration of diagnostic quantities of radiotracers in clinical use to normal subjects. List, and from the perspectives afforded by the ALARA principle, comment on the principles by which a Human Research and Ethics Committee could, in general, evaluate such proposals.
53. Briefly discuss the principles of radioprotection as they apply to the clinical practice of nuclear medicine. Provide specific examples of the applications of each of these principles.





54. Outline a thyroid-screening program suitable for research workers involved in labeling compounds with I-125 and/or I-131.
55. Briefly describe the methods used to monitor for stray radioactivity following a spill involving 37 MBq of I-131 in liquid form being administered for thyroid therapy. Provide an outline of decontamination procedures in such a situation and describe what future actions, if any, may be necessary.
56. In the context of SPECT imaging, briefly define and explain the use or significance of:
- |                          |                              |
|--------------------------|------------------------------|
| (a) gadolinium source    | (f) cross-talk contamination |
| (b) coincidence imaging  | (g) pile-up correction       |
| (c) flash ADC            | (h) fan-beam focal length    |
| (d) auto-tune            | (i) holospectral imaging     |
| (e) digital gamma camera | (j) truncation artifacts     |
57. With the aid of diagrams describe components of a single crystal gamma camera. Describe how each of these components may contribute to the degradation of image quality.
58. Describe techniques for radio-isotope-based non-uniform attenuation correction in SPECT. Sketch the geometries of such systems, discuss reconstruction methods, accuracy of the techniques applications and problems. Compare dual scanning collimated line source technique to collimated line source with fan beam geometry.
59. Why is photon scatter a problem in nuclear medicine? Compare at least three techniques for scatter correction of images.
60. Describe the essential features of a system used for gamma-ray spectroscopy.
61. Scintillation detectors have a relatively poor energy resolution. As a consequence, semiconductor detectors have been introduced to improve the resolving power of gamma spectrometers. Discuss at least two types of semiconductor detectors used in gamma spectrometry. Why are they not used more routinely in nuclear medicine applications? Describe a semiconductor being used in routine nuclear medicine imaging. What is the energy resolution of this system and what are the potential clinical advantages of this improved energy resolution?



CCPM Membership Examination

Edition 11.1

62. Describe a system that may be used to image the I-127 content of the thyroid. What are the advantages and disadvantages of this system over more standard I-123 thyroid imaging with a gamma camera? Describe how and when measurements are made as part of a typical thyroid bio-assay monitoring program. Who needs to be part of this program and what are the action levels?
63. (a) Describe those factors that contribute to dead-time of a detector system.  
 (b) Define *paralyzable* and *non-paralyzable* systems and illustrate each with an example of a detector system that is paralyzable and a detector system that is non-paralyzable.  
 (c) Describe two methods by which dead-time may be determined.  
 (d) Suppose a nonparalyzable system has a dead time of 1 microsecond. You measure a signal of 200,000 counts in 1 minute. What is the true number of counts?  
 (e) Describe a clinical nuclear medicine exam in which accurate deadtime correction is essential and explain why.
64. Sketch and describe the changes in the energy spectrum from a NaI-based detector for Cr-51 (320 keV) if:  
 (a) a thicker NaI(Tl) crystal were used;  
 (b) a one-inch slab of lucite were interposed between the Cr-51 source and the NaI scintillation detector;  
 (c) images of the knee were being acquired using Ga-67 citrate ("spot views") instead of Cr-51  
 (d) one-inch slab of lucite were placed behind the Cr-51 source.  
 (e) How does the spectrum of Ga-67 change if a LEGP collimator is used instead of a MEGP, what about if a pinhole collimator is used?
65. A source is to be counted for a time  $t_G$  in the presence of background and measured  $G$  counts in  $t_G$ . A second measurement taken over time  $t_B$  for the background alone and measured  $B$  counts in  $t_B$ . If  $\sigma_G$  and  $\sigma_B$  are the respective standard deviations, derive an expression for the standard deviation  $\sigma_r$ , of the net signal rate:  $r = G/t_G - B/t_B$ . If the combined time  $t = t_G + t_B$  to measure  $G$  and  $B$  is fixed, then how should the times  $t_G$  and  $t_B$  available for counting be optimally divided between the two measurements so as to minimize  $\sigma_r$ ?
66. In the context of positron emission tomography, briefly define and explain the use or significance of:
- |                             |                            |
|-----------------------------|----------------------------|
| (a) line of response        | (f) axial slice width      |
| (b) scatter fraction        | (g) 3-D acquisition mode   |
| (c) <b>interplane</b> septa | (h) single-slice rebinning |
| (d) random coincidence rate | (i) axial acceptance angle |
| (e) singles rate            | (j) partial ring geometry  |



CCPM Membership Examination

Edition 11.1

67. Sketch a diagram of a typical PET scanner. Describe individually most important components. Include typical performance parameters.
68. Compare 3-D and 2-D acquisition modes of a state-of-the-art PET scanner. List advantages and disadvantages of 3-D mode. Include reconstruction techniques in your comparison. What are the applications for 3-D mode scanning?
69. Describe, including diagrams, the operation of a gamma camera in coincidence mode for 511 keV imaging. Compare the performance of this device, to a typical PET scanner, and to the standard gamma camera equipped with ultra high-energy collimators. Include typical values of described parameters. List advantages and disadvantages of each device. Give examples of clinical applications.
70. Briefly define the following NEMA (National Electrical Manufacturers Association) terms as appropriate for a scintillation camera and provide typical values for a modern camera:
- |                                      |  |
|--------------------------------------|--|
| (a) intrinsic spatial resolution     | (g) intrinsic count rate performance                   |
| (b) intrinsic energy resolution      | (h) multiple window spatial registration               |
| (c) intrinsic flood field uniformity | (i) system sensitivity                                 |
| (d) intrinsic spatial linearity      | (j) detector-detector sensitivity variation            |
| (e) system alignment                 | (f) system spatial resolution with and without scatter |
71. Describe the design of the digital gamma camera. What are the benefits of digital gamma camera in comparison to the Anger design? What difference has this made in performance characteristics?
72. Describe the effects of crystal thickness on intrinsic spatial resolution, system spatial resolution without scatter, and system sensitivity for Tc-99m and I-131. How does crystal thickness affect spatial resolution and sensitivity in PET imaging?
73. What are the sources of intrinsic flood field non-uniformity? What scintillation camera design features serve to minimize such defects?
74. The pixel-size calibration of modern scintillation cameras is often performed by field service personnel using specialized equipment during camera installation or servicing. Suppose that you are responsible for determining the pixel size calibration of an older model camera for which no calibration accessories exist, but that you have access to the following items: a ruler, two Co-57 spot markers, and a copy of NEMA standards publication NU-1 (2001).
- Describe a spatial domain technique for determining the  $X$  and  $Y$  pixel size calibration factors in  $mm/pixel$ .
  - What assumption about camera spatial linearity is implicit in this technique?



CCPM Membership Examination

Edition 11.1

75. Suppose that you are responsible for determining the pixel-size calibration of an older model camera for which no calibration accessories exist, but that you have access to the following items: a ruler, a flood source, an orthogonal hole phantom and a copy of NEMA standards publication NU-1 (2001). In estimating the pixel-size calibration for a gamma camera using these tools, Fourier analysis of the image of an orthogonal hole phantom has potential advantages over direct estimation in the spatial domain.
- Consider the magnitude of the 2-D Fourier transform of an image of an orthogonal hole phantom, that is a two-dimensional array of point sources on a regular grid with spacings  $\Delta X$  and  $\Delta Y$ . Explain why peaks occur, indicate their positions in the spatial frequency domain, and relate these positions to the spatial domain grid spacings.
  - If the exact positioning of the points from the orthogonal hole phantom is distorted due to spatial positioning errors (eg non-linearities) in the camera, how is the Fourier transform affected?
76. Fourier analysis techniques are frequently used in nuclear medicine, for example in reconstruction and image processing. Considering the image of an orthogonal hole phantom:
- Show that the magnitude of the 2-D Fourier transform is not altered by translation of the image.
  - Prove that the 2-D Fourier transform of a rotated image has spatial frequency components  $(u', v')$  which can be expressed as a rotated version of the spatial frequency components  $(u, v)$  of the unrotated image, the rotation angle being the same in both domains.
77. The pixel-size calibration of modern scintillation cameras is often performed by field service personnel using specialized equipment during camera installation or servicing. Suppose that you are responsible for determining the pixel-size calibration of an older model camera for which no calibration accessories exist, but that you have access to the following items: a ruler, a flood source, an orthogonal hole phantom and a copy of NEMA standards publication NU-1 (2001).
- Assume that the spatial linearity of the old camera is poor and that you have doubts concerning the reproducibility of the measurements made directly on the acquired image. Using the flood source, orthogonal hole phantom, NEMA method for centroid determination, describe a spatial frequency domain technique for determining the  $X$  and  $Y$  spatial calibration factors in  $mm/pixel$ .
  - How is this approach an improvement over measurements made directly on the acquired image for cameras with poor spatial linearity?



CCPM Membership Examination

Edition 11.1

78. Briefly define and explain the use or significance of the following in animal imaging:
- |                            |                              |
|----------------------------|------------------------------|
| (a) depth of interaction   | (f) Radioactive microspheres |
| (b) partial volume effects | (g) Knock-out mouse          |
| (c) Viral Transfection     | (h) Reporter Gene            |
| (d) Na/K symporter         | (i) constitutive promoter    |
| (e) electroporation        | (j) Tuy's condition          |
79. Outline and contrast SPECT/CT and SPECT with radioisotope transmission capabilities. Consider hardware, acquisition parameters, reconstruction, cost, and radiation safety; and include a labeled diagram of a SPECT/CT system.
80. Describe how reporter genes and reporter probes are used in nuclear medicine imaging, with the aid of a diagram. Describe the differences between receptor-based, transporter-based, and enzyme-based reporter genes.
81. Transplanted cells can be visualized *in vivo* using nuclear medicine either by pre-labeling the cells with a radioisotope, or via the reporter gene / reporter probe paradigm. Explain these two methods as they pertain to cell tracking, briefly listing advantages and disadvantages of each.
82. In the context of gated SPECT acquisition, briefly define or explain:
- |   |                         |
|---|-------------------------|
| (a) end-diastolic volume                    | (f) sinus rhythm        |
| (b) list mode                               | (g) phase analysis      |
| (c) ejection fraction                       | (h) atrial fibrillation |
| (d) ECG gated frame mode                    | (i) bundle branch block |
| (e) premature ventricular contraction (PVC) | (j) cardiac output      |
83. Describe in detail, using diagrams, the acquisition of a gated equilibrium blood pool study. The data from such a study are corrupted when significant arrhythmia is present. Explain how this occurs and suggest methods that can be used to overcome this difficulty.
84. Consider a choice of imaging modality for a patient with suspected coronary artery disease (CAD). Compare coronary angiography, echocardiography, and nuclear medicine. Discuss the information, which can be provided by each of these modalities, cost and availability, and clinical relevance. Could other modalities be potentially useful? Make a case for the role of a nuclear medicine scan in diagnosing CAD.
85. What is the role of gated SPECT perfusion imaging? What are typical image acquisition parameters? Discuss image-processing techniques used for the automated calculation of the ejection fraction from gated SPECT. Discuss the reliability and accuracy of these algorithms.





CCPM Membership Examination

Edition 11.1

86. What is the role of an equilibrium gated blood-pool study? Describe the techniques used to estimate ejection fraction. What are the inherent limitations of this technique? What are its advantages and disadvantages in comparison to gated myocardial perfusion imaging for measuring ejection fraction? What is phase analysis and how are these measurements made? What is the role of phase analysis in the management of heart disease?
87. Briefly define and describe the use or significance of the following to SPECT imaging:
- |                           |  |
|---------------------------|--|
| (a) log power spectrum    | (f) Ordered Subsets Expectation Maximization |
| (b) central slice theorem | (g) Fast fourier transform                   |
| (c) sinogram              | (h) depth dependent resolution recovery      |
| (d) ramp filter           | (i) Partial volume effect                    |
| (e) septal penetration    | (j) Metz filter                              |
88. Discuss the differences between fan-beam and parallel hole collimators for SPECT including a discussion of their respective performance parameters, implications for image reconstruction and attenuation correction techniques.
89. Describe in detail, filtered backprojection and iterative techniques for image reconstruction in SPECT. Discuss the advantages and disadvantages of iterative reconstruction compared to filtered backprojection in the context of clinical implementation.
90. Present the problem of voluntary patient motion (as opposed to cardiac or respiratory motion) during SPECT and dynamic planar imaging. Describe typical algorithms that can be applied for motion correction of planar dynamic, and SPECT acquisitions. Discuss limitations of such algorithms.



IV NUCLEAR MEDICINE SPECIALTY

1. Many different factors influence the quality of SPECT images.
  - (a) What are the artifacts due to photon attenuation?
  - (b) What will be the effect on the SPECT image if a small hot object is placed in the center of the field of view?
  - (c) What will be the effect on the SPECT image if a small hot object is placed near the outer edge of the field of view?
  - (d) Discuss the advantages and disadvantages of using circular versus non-circular orbit in a SPECT acquisition. What are the possible artifacts in the image?
2.
  - (a) What are the advantages and disadvantages related with the use of fan-beam collimators in SPECT cameras?
  - (b) Why do these collimators have better sensitivity than the standard parallel hole collimators?
  - (c) Discuss the use of pinhole collimation in SPECT imaging.
3.
  - (a) Discuss the advantages and disadvantages of using a standard SPECT camera for imaging positron emitting isotopes.
  - (b) What changes can or must be made to the SPECT camera to use it for coincidence imaging?
4. Briefly outline the differences in camera design for PET and SPECT. What detectors are used in both systems and why? Discuss the need for using collimators for PET and SPECT.
5. Why is it important to correct for attenuation in SPECT and PET? Compare the techniques used for non-uniform attenuation correction in SPECT and PET. Discuss the magnitude of the correction required, accuracy of the technique, transmission sources used, algorithms for the attenuation correction, and clinical applications. Prove that the correction is independent of depth for simple PET geometry.
6. List five major, medically used positron-emitting radionuclides and state their important physical characteristics such as half-life, positron energy, etc. For each isotope listed, provide one associated radiopharmaceutical and its application. Describe typical positron radiopharmaceutical production facility, highlighting problems.
7.
  - (a) Compare the following aspects of PET against SPECT:
    - (i) spatial resolution;
    - (ii) sensitivity (including realizable count rates); and
    - (iii) ability to quantitate radioactivity.
  - (b) What physical phenomena limit performance of SPECT and PET?



8. Why is F-18 a useful nuclide in PET, given that the fluorine and its compounds are not normal metabolic substrates? What are the clinical applications of F-18 imaging? Provide a minimum of 5 different radiopharmaceuticals spanning oncology, neurology, and cardiology. For each provide a brief description of its use and what it measures.
9. Briefly define or explain:
- |                  |  |
|------------------|--|
| (a) photo-peak   | (f) electronic avalanche                   |
| (b) dynode       | (g) space charge                           |
| (c) W for air    | (h) quenching                              |
| (d) glow curve   | (i) coincidence loss                       |
| (e) Compton edge | (j) paralyzable and non-paralyzable system |
10. (a) Describe the following radiation detectors based on gas ionization and discuss their relative merits in the field of radiation protection:
- ionization chamber;
  - proportional counter; and
  - Geiger-Mueller counter.
- (b) How are these detectors calibrated to give readings in radiation quantities pertinent to radiation protection?
11. Briefly discuss.
- the calculation of absorbed dose in air from a measurement of ionization in air with an ionization chamber;
  - the energy discrimination ability of proportional counters;
  - how to distinguish between beta and gamma radiation with a Geiger-Mueller counter;
  - how to determine source strength of a beta emitter with a Geiger-Mueller counter.
12. Describe the principles of operation of semiconductor detectors and discuss their use in radiation protection.
13. Draw a typical pulse height spectrum obtained with a Si(Li) detector and an encapsulated Cs-137 gamma source. Identify and explain the main features of the spectrum.
14. Discuss the techniques used for obtaining pulse height distributions from beta emitters by means of liquid scintillation counting.
15. Thermoluminescent dosimetry (TLD) is a widely used relative dosimetry technique. Briefly discuss the main characteristics of a typical TLD reader and at least three materials used as radiation sensitive phosphors.





CCPM Membership Examination

Edition 11.1

16. Briefly define or explain:
- |                                       |  |
|---------------------------------------|--|
| (a) detriment in a population         | (f) exposure                               |
| (b) quality factor                    | (g) exposure rate constant                 |
| (c) collisional stopping power        | (h) quenching in a Geiger-Mueller detector |
| (d) LET                               | (i) effective dose                         |
| (e) relative biological effectiveness | (j) body burden                            |
17. In health care facilities where radiation is used for diagnostic or therapeutic purposes, protection of four groups of people may need to be considered:
- Nuclear Energy Workers (NEW's);
  - non-NEW's working in the vicinity of a source radiation;
  - clerical and other peripheral staff; and
  - public at large.
- Specify and justify regulatory and operational dose equivalent limits for the four groups and compare them to the dose equivalent from natural background.
18. Discuss the operating philosophy for radiation protection practices known as ALARA, indicating how it influences interpretation of effective and equivalent dose limits. Describe five radiation-laboratory working practices that are consistent with the ALARA philosophy.
19. A fetus is exposed to a dose of 50 mSv during the 10th week of pregnancy. Discuss the possible effect(s) of this exposure and estimate the risk factors associated with each effect. What is the effective dose limit for occupational exposure of pregnant women who are NEW's?
20. Give brief descriptions/explanations of the following:
- G Value;
  - Free radical;
  - Solvent and solute radicals
  - D37 dose;
  - Hydrogen subtraction;
- 21.** The primary agents that produce damage in cells irradiated by x- or gamma rays are high energy electrons liberated through interactions of photons with whole atoms, orbital electrons or nuclei. Briefly discuss the three most important modes of photon interactions with matter in the photon energy range between 10 keV and 10 MeV describing the general dependence of each mode.
22. Molecules can be changed damaged or inactivated by either *direct* or by *indirect action* of ionizing radiation. Explain what is meant by these terms. Under what circumstances would direct action be the predominant mode of interaction of target molecules? What is the relationship between dose and the production of molecules inactivated by direct action, and how may the size of the target molecules or submolecular structures be calculated from this relationship?



CCPM Membership Examination

Edition 11.1

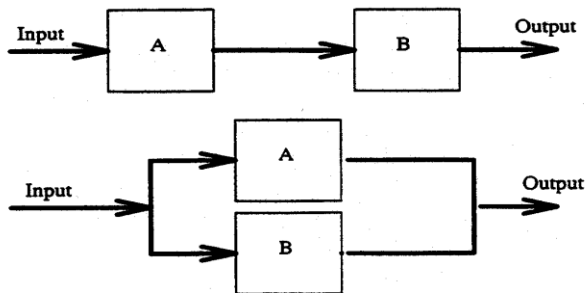
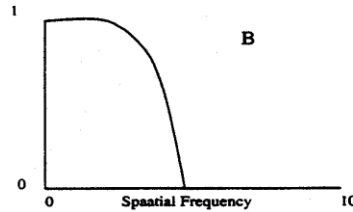
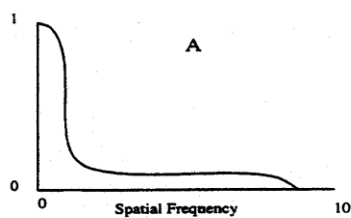
23. Outline the reasons for believing that the principal site of radiation-induced lethal damage is located in the chromosome. Describe how three frequently observed types of chromosome aberration are produced.
24. (a) Draw a typical radiation survival curve for mammalian cells. Present an equation which is a good fit to curves of this type, and explain its parameters in relation to the understanding of mechanisms of cell killing.  
(b) Briefly discuss how cell survival is determined experimentally.
25. Briefly define or explain:
- |                     |                      |
|---------------------|----------------------|
| (a) meiosis         | (f) metastasis       |
| (b) interphase      | (g) exfoliation      |
| (c) apoptosis       | (h) mitotic index    |
| (d) growth fraction | (i) mitosis          |
| (e) necrosis        | (j) hypoxic fraction |
26. Discuss in detail the cell cycle and give three examples of cell cycle times for mammalian cells. Describe the variation of radiosensitivity of a cell as a function of the position in the cell cycle.
27. Briefly discuss at least two techniques which are used to produce synchronously dividing cell cultures.
28. Discuss the use of autoradiography and flow cytometry in the study of cell kinetics.
29. Briefly define or explain:
- |                |                 |
|----------------|-----------------|
| (a) mutation   | (f) anaphase    |
| (b) DNA        | (g) restitution |
| (c) RNA        | (h) chromatid   |
| (d) cell cycle | (i) chromosome  |
| (e) ploidy     | (j) metaphase   |
30. Discuss the radiation effects on chromosomes and list four specific examples of the damage. Explain the difference between chromosome and chromatid aberrations, and discuss the effects of dose, dose rate, and LET on specific types of chromosome damage.
31. Briefly discuss the effects of radiation on cellular constituents **other than** DNA and chromosomes.
32. Briefly discuss three types of cell response to radiation:
- apoptosis;
  - division delay;
  - reproductive failure



CCPM Membership Examination

Edition 11.1

33. Using equations to illustrate your answers where appropriate, answer the following:
- What are two properties of linear imaging systems?
  - What is meant by “*shift invariant*”? Give examples of both “*shift variant*” and shift invariant systems.
  - What is a point response function?
34. Using equations to illustrate your answers where appropriate, answer the following:
- What is the Modulation Transfer Function (MTF) and how is it related to the point response function?
  - For a linear cascaded two-stage system with point response function  $p_1(x)$  and  $p_2(x)$ 
    - what is the total point response function of the system?; and
    - what is the MTF of the total system?
35. For the systems illustrated graphically below with the corresponding MTF's, what is the MTF for the complete system (i.e., at the output)?





**CCPM Membership Examination**

**Edition 11.1**

36. Draw a  $2 \times 2$  matrix of disease (**D+** or **D-**) and a diagnostic test (**T+** or **T-**) for some patient population. Identify true positive, false positive, true negative and false negative cases. Using your table where necessary, clearly define the following:
- (a) sensitivity;
  - (b) specificity;
  - (c) accuracy;
  - (d) prevalence (of disease)
  - (e) positive predictive value of the test
  - (f) negative predictive value of the test
37. Describe in detail how a receiver operating characteristic (ROC) curve is generated and sketch a conventional curve. Label the axes clearly and indicate operating points on the curve corresponding to “*strict*” and “*lax*” thresholds.
38. Outline a method (the “Rating Method”) for generating an ROC curve using a single observer and a number of diagnostic images.
39. Describe a “*contrast-detail*” analysis of an imaging system. Sketch and label a typical contrast-detail graph for a CT scanner. What are the major limitations of this technique?
40. a) Describe how a Failure Modes and Effects Analysis could be performed in the nuclear medicine setting.
- b) For each of the following Failure Modes, identify one possible cause and suggest, with reasons, values for Frequency (F), Severity (S) and Detectability (D) parameters.
- (i) incorrect patient for procedure;
  - (ii) incorrect scanning parameters for a SPECT exam;
  - (iii) I-131 therapy performed on a pregnant patient.
- c) For each case in (b) above, what preventative measures could be employed to decrease D, (i.e. Increase the detectability of the error before it reaches the patient)?
41. In relation to Radiology Information Systems (RIS) in running an imaging department, explain the purpose and use of:
- a) firewall,
  - b) checksum,
  - c) IPv6,
  - d) RAID,
  - e) DICOM,
  - f) PACS.